

SECTION A: 40 MARKS

Answer all questions in this section

Questions 1 to 20 carry two marks each

1. Add $35 + 23$

2. Write 419 in words.

3. A lesson which lasted 40minutes ended at 8:10a.m. At what time did it start?

4. Kapere has 8.75 kg of carry powder to be packed in packets of 0.25 kg each. How many packets will Kapere make?

5. Study and complete the sequence below:

1, 3, 7, 13, 21, _____

6. Simplify: $4k - 5m + 2k - 3m$

7. Write "twenty thousand, four hundred four" in figures.

8. Solve: $3(x + 4) = 24$

9. Express 3 kg to grams.

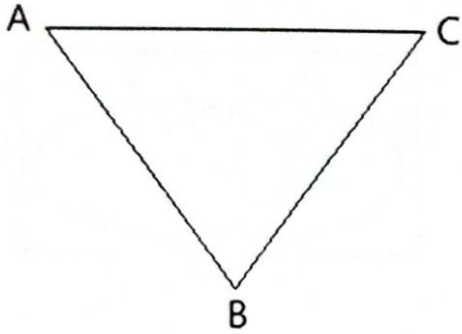
10. What number has been expanded to get:
 $(4 \times 10^2) + (2 \times 10^0) + (6 \times 10^{-1}) + (1 \times 10^{-2})$?

11. Given that $p = -4$, $q = 3$ and $c = -2$, find the value of $\frac{pq}{c}$.

12. Work out the value of x : $3 + 4 = x$ (finite 5)

13. Solve: $2^{3k} \div 2^k = 16$

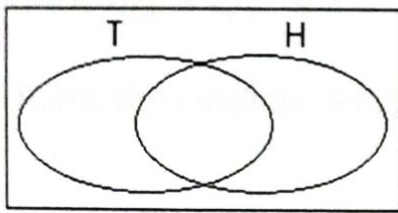
14. Bisect angle ABC in the figure below.



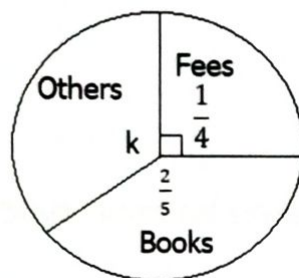
15. The probability that a car picked at random from the park is made in Japan is $\frac{5}{8}$. What is the probability of picking one that is not made from Japan?

16. The price of a skirt increased by 10%. If the new price is sh. 44,000, find the original price of the skirt.

17. Shade the complement of H



18. Study the pie-chart below and use it to find the value of k.



19. Find the square root of $5\frac{4}{9}$.

20. A fisherman saw a boat on water on a bearing of 060° . What is the bearing of a fisherman from the boat?

SECTION B: 40 MARKS

21. Given the digits 2, 0 and 8

a) Form the smallest 3-digit number using the digits above. (1 mark)

b) Write the numeral formed in (a) above in scientific notation. (2 marks)

c) Show the above numeral on the abacus. (2 marks)

22. a) Subtract $6m - 8$ from $4m - 6$ (2 marks)

b) Solve the equation: $2 + r = \frac{3}{5}r + 6$ (3 marks)

23. The following items were bought by a pupil for the school:

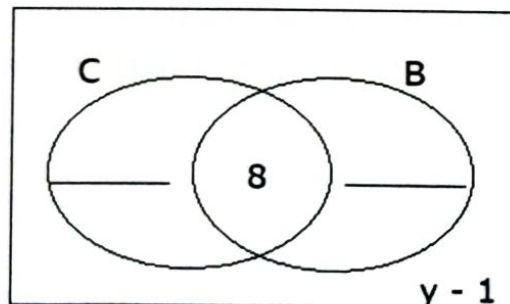
- 2 dozens of books at sh. 6,000 each
- A geometry set at sh. 3,500
- 3 dozens of pencils at sh. 3,000 each
- 6 pens at sh. 500 per pen.

a) Calculate the total expenditure. (4 marks)

b) Work out his change if he went with sh. 30,000 to the shop. (1 mark)

24. At a gathering of men, $2y$ men ate beef (B) only, 50 men ate chicken (C), 8 men ate both chicken and beef while $y - 1$ ate neither of the two dishes.

a) Complete the Venn diagram below. (2 marks)



b) If 8 men did not eat chicken, find the value of y . (2 marks)

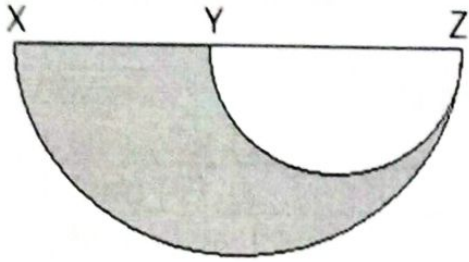
c) A dish representative is to be selected, what is the probability that he likes none of the dishes? (1 mark)

25. A trader bought 300 bags of maize each weighing 30 kg.

a) How many tonnes of maize did the trader buy? (3 marks)

b) If he hired a vehicle which carries 3 tonnes per trip, how many trips did he make to transport of the maize? (2 marks)

26. In the diagram below, $XZ = 28$ cm and YZ is half of XZ . Find the area of the shaded part. (take $\pi = \frac{22}{7}$) (5 marks)



27. A motorist left town A for town B at an average speed of 80km/hr. for 3 hours. He rested for an hour and then returned to town A at a steady speed of 60km/hr.

a) Find the distance between town A and town B. (2 marks)

b) Calculate the motorist's average speed for the whole journey. (3 marks)

28. The table below shows the rate at which different currencies were sold and bought in Commercial bank during the month of May. Use it to answer the questions that follow.

Currency	Selling in Ug.shs	Buying in Ug.shs
1 US dollar (\$)	3,800	3,650
1 Euro (€)	4,020	4,000
1 Rwandese franc	5.0	4.0

a) If Bob had Ug.sh. 15,200,000, how many Euros did he get?
(2 marks)

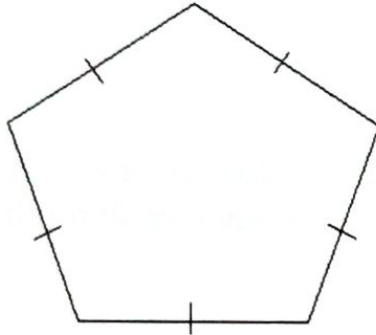
b) Mubiru came from Rwanda with 5,292,500 Rwandese francs and exchanged for US dollars. How many dollars did he get from the bank?
(3 marks)

29. a) Using a ruler, a pencil and a pair of compasses only, construct a triangle MNP in which angle $PMN = 60^\circ$, $MNP = 45^\circ$ and line $MN = 8$ cm.
(4 marks)

b) Drop a perpendicular line from point P to meet line MN at R (1 mark)

30. a) Find the number of sides of a regular polygon with an exterior angle of 45° . (2 marks)

- b) By illustration, how many triangles has the polygon below? (1 mark)



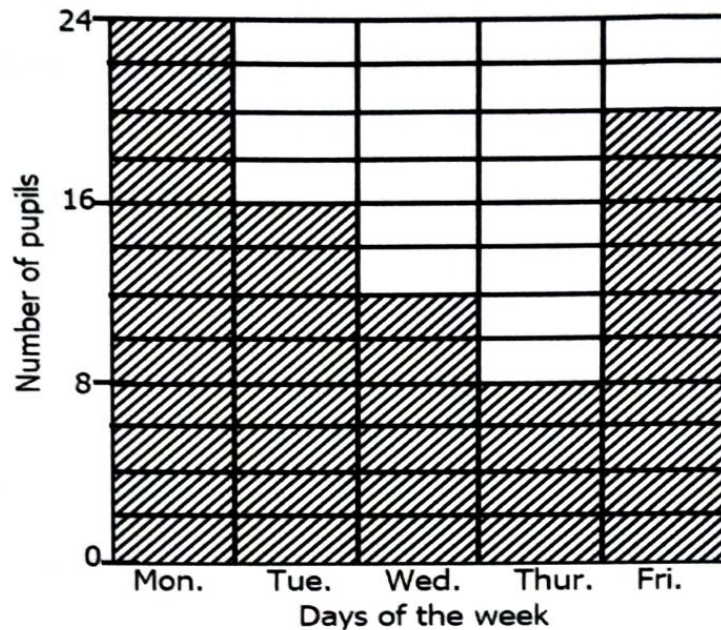
- c) Calculate the interior angle sum of the polygon above. (2 marks)

31. A milk vendor sells 300 litres of milk daily using a cuboidal container that measures 15 cm by 10 cm by 8 cm.

a) How many such containers does he sell in a week? (3 marks)

b) If each container costs sh. 1,800, how much money does he collect from the milk in a week? (2 marks)

32. The graph below shows the number of pupils absent in a class of 50 pupils for a week. Use it carefully to answer the questions that follow.



- a) Which day had the highest attendance? (1 mark)
- b) Find the total number of pupils who attended the whole week. (2 marks)
- c) How many more pupils were absent on Friday than Thursday? (2 marks)

END

SECTION A (40 Marks)

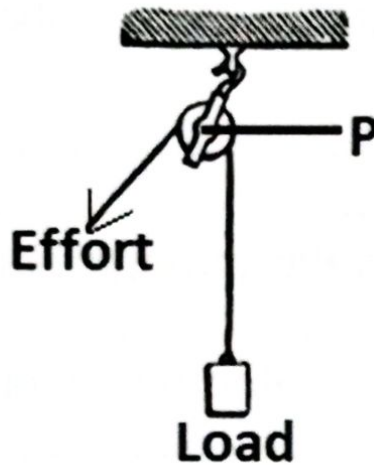
1. Give any **one** practice that promotes oral health.

.....
.....

2. Identify any **one** grazing system used in the rearing of cattle.

.....

The diagram below shows a simple machine. Use it to answer questions 3 and 4.



3. Name the pulley system shown above.

.....

4. How can friction be reduced at point **P**?

.....
.....

5. State any **one** property of air.

.....
.....

6. What is pollination?

.....
.....

7. What type of change is rusting?

.....

8. Mention any **one** condition needed by a seed to germinate.

.....

.....

9. Name the weather instrument used to show the direction of wind.

.....

10. What is the importance of washing hands after visiting a toilet?

.....

.....

11. Which body organ is greatly affected by alcohol?

.....

12. Give **one** block in a food path.

.....

13. **Identify the disease the person below is suffering from.**



.....

14. How is the choroid adapted to its function of preventing internal reflection in the human eye?

.....
.....

15. Write down **one** process that helps in formation of soil.

.....
.....

16. Identify **one** product got from bees.

.....
.....

17. Write **PHC** in full.

.....
.....

18. Give **one** method of planting crops in the garden.

.....
.....

19. Where does the digestion of food begin?

.....
.....

20. Identify any **one** example of a magnetic material.

.....
.....

21. Mention any **one** example of a proboscidean mammal.

.....
.....

22. Give the meaning of the term **pitch** as used in sound.

.....
.....

23. Name **one** type of blood vessels in the body.

.....
.....

24. Mention **one** method of artificial vegetative propagation.

.....
.....

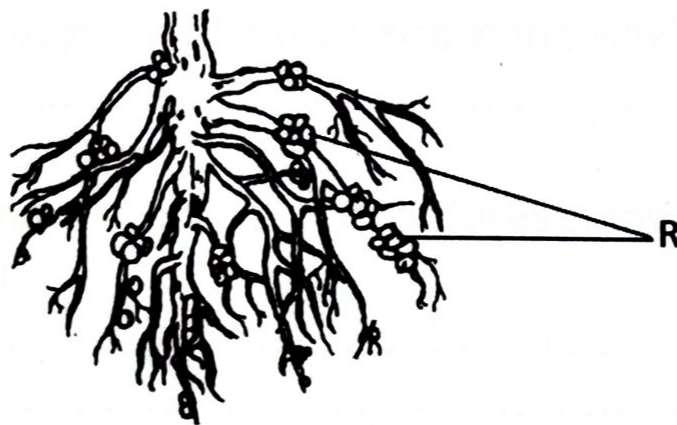
25. Give any **one** agent of soil erosion.

.....
.....

26. Which disorder of the skeletal-muscular system is caused as a result of accumulation of lactic acid in muscles?

.....
.....

The diagram below shows plant roots. Use it to answer questions 27 and 28.



27. Name part **R**

.....

28. State the function of part **R**.

.....
.....

29. Identify any **one** milk breed of goats.

.....
.....

30. Mention any **one** example of an animal fibre.

.....

31. State **one** way a baby acquires natural immunity.

.....
.....

32. In the space below draw a leaf with reticulate leaf venation.

33. Give **one** example of a resource in the environment.

.....
.....

34. Identify **one** way the spread of Tuberculosis can be prevented.

.....
.....

35. Where does fertilization take place in a human being?

.....

36. Why is loam soil considered the type of soil suitable for crop growing?

.....

37. What is a joint?

.....
.....

38. How do tapeworms enter our bodies?

.....
.....

39. Name **one** reptile which has limbs.

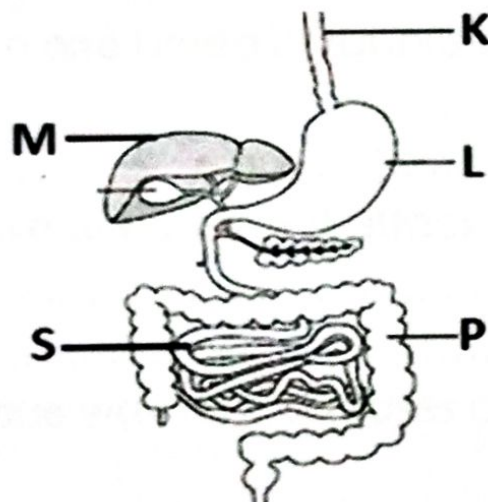
.....

40. State any **one** property of magnets.

.....
.....

SECTION B: (60 marks)

41. The diagram below shows a body system. Study it carefully and use it to answer the questions that follow.



(a) Identify the body system shown above.

.....

(b) Name the part marked **K**.

.....

(c) How is part **M** important during the digestion of food.

.....
.....

(d) Give **one** disorder of the digestive system.

.....

42. (a) Name any **one** vaccine administered to babies at birth.

.....

(b) Point out **two** examples of childhood immunisable diseases.

(i).....

(ii).....

(c) Why are parents advised to take their children for immunization?

.....
.....

43. (a) List down **one** breed of rabbits kept by farmers in Uganda.

.....

(b) Give any **two** diseases that attack rabbits.

(i).....

(ii).....

(c) State any **one** way how diseases can be prevented in rabbits.

.....

44. Complete the table below correctly.

Disease	Cause	Signs and symptoms
Polio	Fever and paralysis
.....	Amoeba/bacteria	Diarrhoea with blood in it
Cholera	Vomiting and diarrhoea
Typhoid	Bacteria

45. (a) Give **two** examples of spore bearing plants.

(i)

(ii)

(b) How is the reproduction in pines similar to that in millet?

.....

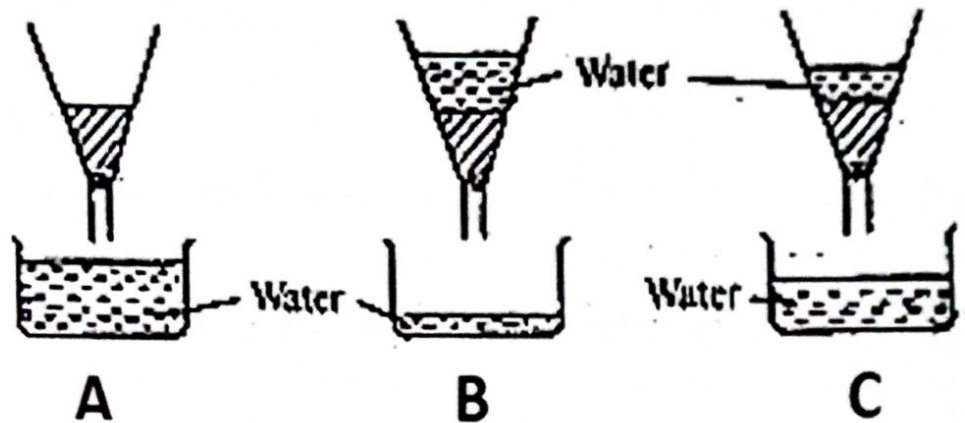
.....

(c) Write down **one** example of a flowering plant.

.....

.....

46. Use the diagram below to answer the questions that follow.



(a) Name the type soil marked **A** and **B**.

(i) **A**.....

(ii) **B**.....

(b) State any **two** uses of soil.

(i).....

(ii).....

47. **Re-arrange the following statements in correct order.**

- Measure one teaspoonful of salt and eight teaspoonful of sugar into the water.
- Measure one litter of clean boiled water in a clean container.
- Wash your hands with clean water and soap.
- Stir the mixture until it makes a solution.

Correct order

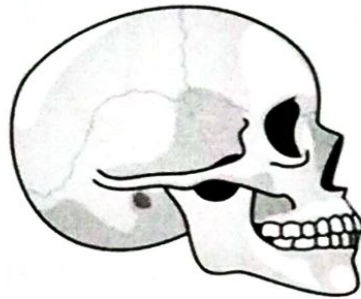
(i).....

(ii).....

(iii).....

(iv).....

48. The diagram below shows part of a skeleton. Use it to answer the questions that follow.



(a) Name one body organ protected by the part shown above.

.....

(b) State any **two** functions of the skeleton apart from protection.

(i).....

(ii).....

(c) Mention **one** disease of the skeleton.

.....

.....

49. (a) What is first aid?

.....

.....

(b) Give any **two** reasons for giving first aid.

(i).....

(ii).....

(c) Name the item below which is found in a first aid box.



.....
50. Match the list in A to that in B correctly.

A

- (i) Salmon fish
- (ii) Silverfish
- (iii) Snake
- (iv) Bat

B

- Reptile
- Mammal
- Fish
- Insect

- (i) Salmon fish.....
- (ii) Silverfish.....
- (iii) Snake.....
- (iv) Bat.....

51. (a) What is energy?

.....
.....

(b) Give any **one** form of energy.

.....
.....

(c) Which type of energy is possessed by a leaf falling from a tree?

.....
.....

53. (a) Point out **one** part of the circulatory system.

.....
.....

(b) Mention the component of blood that:

(i) Transports oxygen to all parts of the body.

.....

(ii) Defends the body against infections.

.....

(c) Why do veins have valves in them?

.....
.....

54. (a) State **one** function of each of the following during reproduction.

(i) Ovaries

.....
.....

(ii) Testes

.....
.....

(iii) Fallopian tube

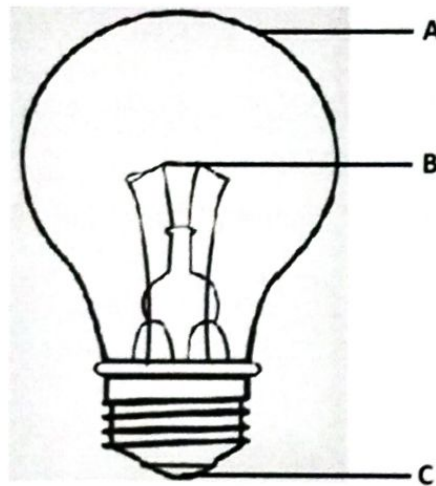
.....
.....

(b) Identify any **one** disease that affects the urinary system.

.....
.....

(d) Calculate the work done by a man who pushed a load of 600N through a distance of 3 metres.

.....
52. The diagram below shows an electric bulb. Use it to answer the questions that follow.



(a) Name the parts marked **A** and **B**

(i) **A**.....

(ii) **B**.....

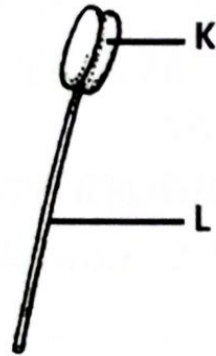
(b) Why is part **B** coiled?

.....
.....

(c) Give **one** form of energy produced by the bulb when it is working.

.....

55. The diagram below shows part of a flower. Use it to answer the questions that follow.



(a) Name the parts marked **K** and **L**.

(i) **K**.....

(ii) **L**.....

(b) State the function of part **K**

.....

.....

(c) What general name is given to the part of a flower shown above?

.....

END

SECTION A (40 MARKS)

1. Name the largest fresh water lake in East Africa.

.....

2. Mention the climatic factor that forced the pastoral tribes to migrate to other areas.

.....

3. Give one way in which traditional crops promote the growth of industries.

.....

4. What helps a person to identify a police officer in a community?

.....

5. How did apartheid practiced in South Africa?

.....

6. Give one problem faced by the government when fulfilling its duties.

.....

7. How can high birth rate be controlled among women?

.....

8. What does the road sign shown below stand for?



.....

9. Which type of soil is good for making pots?

.....


10. Why is Sir Winston Churchill remembered in the history of Uganda?

.....

11. State any one way in which the 1900 Buganda agreement affected Buganda Kingdom.

.....

12. In the space below draw a symbol on the Uganda Coat of Arms that represents the abundant sunshine of Uganda



13. Mention any one pre-colonial trade that took place in Africa?

.....

14. Give one reason why the government of Uganda preserves archaeological sites.

.....

15. State any one way in which people can get their basic needs.

.....

16. Give one way in which agriculture can be improved in Uganda.

.....

17. Name one raw material that is used to make cement.

.....

18. What the use of the weapon below?



.....

19. Give one reason why hydro electricity is mainly generated at the upper stage of a river.

.....

20. Give one factor to consider before choosing a type of transport to use.

.....

21. What title is given to a person who represents the central government in a district?

.....

22. Why did Sir Hesketh Bell encourage cash crop growing in Uganda?

.....

23. How do westerly winds influence the climate of North Western Africa?

.....

24. State any one duty of the judiciary in a democratic country.

.....

25. Which organ of African Union replaced the OAU secretariat?

.....

26. Why are lions called wild animals?

.....

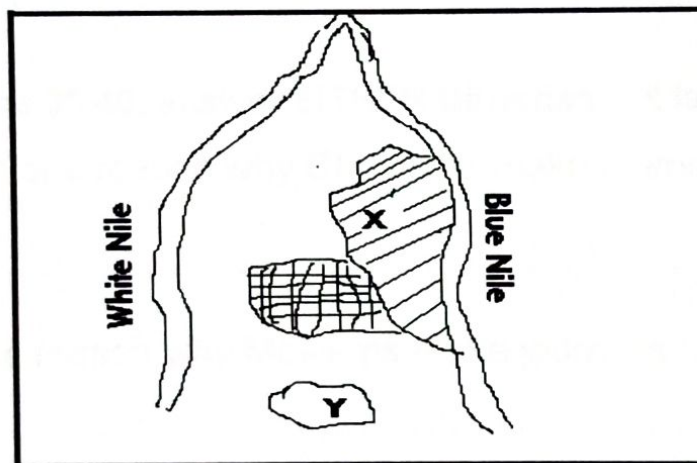
27. Give one way in which children can show respect to their parents.

.....

28. Mention any one human activity that leads to environmental degradation.

.....

Use the diagram below to answer question 29 – 31.



29. Name the irrigation scheme marked X.

.....

30. How is the Blue Nile important to the scheme named in (a) above.

.....

31. How is the irrigation scheme marked X important to Sudan?

.....

32. In which way do radio stations promote economic development in Uganda?

.....

33. State any one reason why multipurpose river projects are established.

.....

34. Which programme was introduced in Uganda to enable all Ugandan children to get free education?

.....

35. Why are Savanna grassland areas suitable for cattle keeping?

.....

For questions 36-40, answer EITHER Christian OR Islamic but NOT both.

36. **Either:** Give one reason why Christians make journeys to holy places.

.....

Or: Give one reason why Moslems make journeys to holy places.

.....

37. **Either:** What name is given to the first four books in the New Testament?

.....

Or: Which is the shortest Surah in the Quran with only three verses?

.....

38. **Either:** How do Christians reflect the light of Jesus to others?

.....

Or: How do Moslems reflect the light of Allah to others.

.....

39. Either: According to the Apostles' Creed, who will come to judge the living and the dead?

.....

Or: Which angel will blow the trumpet on the last day of judgement?

.....

40. Either: Why is it important for a Christian to have a good friend?

.....

Or: Why is it important for a Moslem to have a good friend?

.....

SECTION B (60 MARKS)

41. a) Name any two game parks in Uganda.

(i)

(ii)

b) How do game parks contribute to the economic development in Uganda?

.....

c) How do good hotels promote the tourism industry in East Africa?

.....

42. a) What is a common market?

.....

.....

b) Which common market unites West African countries?

.....

c) Which country has the headquarters of EAC?

.....

d) State one way a common market promotes trade within member states.

.....

43. Complete the table below by filling in correct answers.

Government body	Role played
URA	
Electoral Commission	
	Conserves swamps.
	Conserves natural forests.

45. a) Which right of children is abused when they are not taken to school?

.....

b) State any two causes of child abuse.

(i)

(ii)

c) **Mention any one effect of child abuse.**

.....

46. a) What is rural - urban migration?

.....

.....

b) **Give two reasons why people practice rural - urban migration.**

(i)

(ii)

c) **State one problem that is faced in urban areas.**

.....

47. a) Mention any two vegetation zones in Africa.

(i)

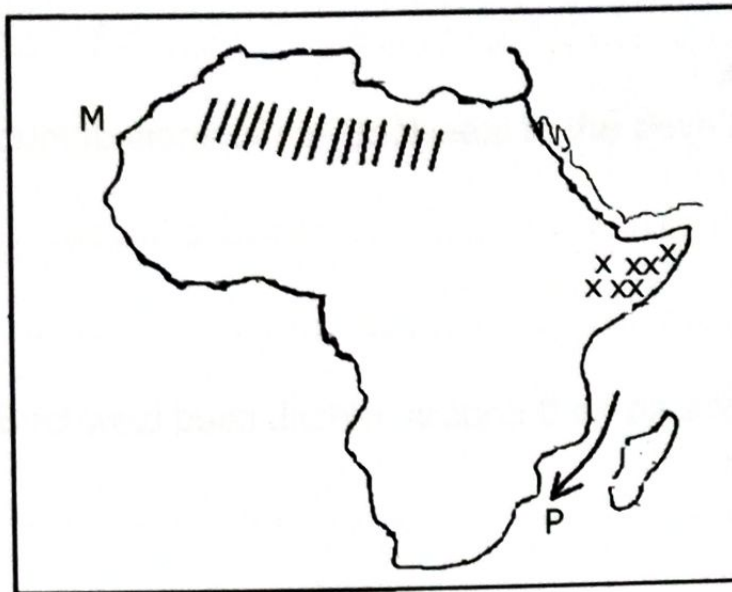
(ii)

b) **Give any two human activities that destroy vegetation.**

(i)

(ii)

44. Study the map below and answer questions about it.



a) Name one country found in the part of Africa marked xxx?

.....

b) Why is the area shaded above not suitable for crop farming?

.....

c) Use letter K to locate Madagascar.

d) Name the ocean currents marked P.

.....

48. a) Write any two local things used by children to make play materials.

(i)

(ii)

b) State two ways in which games and sports are important to children.

(i)

(ii)

49. a) Why is Bigobyamugenyi important to the Bachwezi in Uganda?

.....

b) Mention two contributions of the Bachwezi to the development of Uganda.

(i)

(ii)

c) Why did the Bachwezi build ditches around their palaces?

.....

50. a) What is population?

.....

.....

b) Mention any two advantages of a country with a high population.

(i)

(ii)

c) Name one factor that promotes population growth in East Africa.

.....

For questions 51-55, answer Either Christianity OR Islamic but Not Both.

51. **Either:** a) Which term is used to refer to religious marriage?

.....

b) Give two reasons why Christians marry.

(i)

(ii)

c) According to the Bible, when is a Christian allowed to re-marry?

.....

Or: a) Which Islamic term is used to refer to religious marriage?

.....

b) State two reasons why Moslems marry.

(i)

(ii)

c) According to Islamic faith, mention one punishment given to a Moslem for committing adultery.

.....

52. Either: a) State two ways in which Christians show love to one another.

(i)

(ii)

b) Mention two qualities of a good Christian.

(i)

(ii)

Or: a) State two ways in which Moslems show love to one another

(i)

(ii)

b) Mention any two qualities of a good Moslem

(i)

(ii)

53. Either: Match the following correctly.

A

Moses

Joshua

Joseph of Arimathea

Simon Peter

B

raised Tabitha to life

buried the body of Jesus

wrote Pentateuch books

led Israelites to the Promised Land.

(i) raised Tabitha to life.

(ii) buried the body of Jesus.

(iii) wrote Pentateuch books.

(iv) led Israelites to the Promised Land.

Or: Match the following correctly

Prophet Ibrahim	was the father of Prophet Muhammad
Musa	went to heaven and came back
Prophet Muhammad	built the Kaaba
Abdullah	received Taurat.

- (i) was the father of Prophet Muhammad.
- (ii) went to heaven and came back
- (iii) built the Kaaba.
- (iv) received Taureti.

54. Either: “come and follow me, I will make you a different kind of fishermen” (mark 1:17)

a) Who said the above words?

.....

b) Name two people to whom the above words were said.

(i)

(ii)

c) What were those men mentioned in (b) above doing?

.....

Or: “Whoever believes in Allah and offer options prayers throughout each night of Ramadhan will have his sins forgiver”.

a) Who said the above words?

.....

b) Mention any three lessons learnt from the above Hadith.

(i)

(ii)

(iii)

55. Either: a) Give any two Christian beliefs.

(i)

(ii)

b) Mention any two practices among Christians.

(i)

(ii)

Or: a) Give any two Islamic beliefs.

(i)

(ii)

b) Mention any two practices among Moslems.

(i)

(ii)

END

SECTION A: 50 MARKS

Sub-section I

Questions 1 to 50 carry one mark each

In questions 1 to 10, use the correct form of the word in brackets.

1. Namayanja is proud of her.....(beautiful)
2. The supervisor advised us to write.....than ever. (careful)
3. My uncle'searned him a good job. (loyal)
4. We learntduring an art lesson. (model)
5. She hadthe dress by the time we arrived at the party.
(dirty)
6. I was thein the Kabaka's birthday run. (twelve)
7. By the time the police arrives, the mob.....the
suspect. (burn)
8. A chameleon protects.....by camouflaging. (self)
9. Had weearlier, we would have got all the
drinks. (come)
10. Sheaddressed the assembly. (shy)

In questions 11 to 15, use the most suitable word to complete the sentences.

11. A nineteen year old student was chargeddefilement.
12. It is notfrom here to the airport.
13.does your uncle's house look like?
14. The hall is bigto accommodate all the guests.
15. Jescawhom I told you has come late again.

In questions 16 to 18, give the opposite of the underlined word.

16. She always answers her bosses rudely.

.....
.....

17. Their success was not identified early enough.

.....
.....

18. None of the candidates was encouraged by the head teacher's words.

.....
.....

In questions 19 to 20, give one word for the underlined group of words.

19. We bought these pens from the place where stationery is sold.

.....
.....

20. A female sheep charged at the small girl.

.....
.....

In questions 21 to 23, re-write the sentences giving the plural of the underlined words.

21. The mouse trap could not work properly.

.....
.....

22. The papyrus got burnt during the long drought.

.....
.....

23. The boy's dormitory is still dirty.

.....
.....

In questions **24** to **26**, write the abbreviations in full.

24. a.k.a.

25. R.S.V.P.

26. C/o

In questions **27** to **28**, arrange the following words in alphabetical order.

27. judge, journey, jelly, jungle

.....
.....

28. safe, security, secure, safely

.....
.....

In questions **29** to **30**, arrange the given words into meaningful sentences

29. holiday nice a what John had !

.....
.....

30. it is your how here to from school far ?

.....
.....

Sub-section II

In questions 31 to 50, re-write the sentences as instructed in the brackets.

31. "Lucky, will you ever get any ninety in English?" asked Alex.

(Re-write using.....inquired of.....)

.....
.....

32. Onzima revised hard. He got aggregate four in the recent examination. (Join the two sentences using.....must have.....)

.....
.....

33. Everybody should fight for their rights whenever they can.

(Re-write the sentence and begin: One.....)

.....
.....

34. There was almost no tomato in the market.

(Re-write usinghardly)

.....
.....

35. If I get Obama's address, I will write to him.

(Join the two sentences using.....had got.....)

.....
.....

36. I could not lift the box because it was very heavy.

(Re-write usingso.....that.....)

.....
.....

37. Samarita is our library prefect. Samarita is our class captain.
(Join usingas well as.....)

.....
.....

38. Immediately we switched off the lights, grandmother started snoring.
(Re-write usingbarely.....)

.....
.....

39. We have been given a very hard task.
(Re-write and begin: What a.....!)

.....
.....

40. We got a holiday. It was of two days.
(Re-write as one sentence ending.....holiday.)

.....
.....

41. We have got a gateman. He is thin. He is dark-skinned. He is kind. He is from Congo. (Re-write as one sentence without using "and" or "who")

.....
.....

42. What a beautiful car Mr. Kazibwe has! (Begin Mr. Kazibwe.....)

.....
.....

43. A donkey is very stubborn. It can refuse to move.
(Join using.....such.....that.....)

.....
.....

44. Suzan last wrote to me in December.
(Re-write usingsince.....)

.....
.....

45. Jonathan is my brother. (Re-write ending.....brothers.)

.....
.....

46. You will become strong and healthy if you eat a well balanced diet.
(Re-write the sentence beginning: Unless.....)

.....
.....

47. We were surprised when Rooney failed to score in the match.
(Re-write beginning: Rooney's.....)

.....
.....

48. All trees in the school compound have leaves. (Begin: Every.....)

.....
.....

49. Ronald did not see the snake. The snake bit him.
(Join as one sentence beginning: Had Ronald.....)

.....
.....

50. My mother lay under the tree and fell asleep.

(Rewrite the sentence and begin: Having.....)

.....
.....

SECTION B: 50 MARKS

Questions 51 to 55 carry 10 marks each

51. Read the passage below carefully, and in full sentences, answer the questions that follow.

Mukwasi is a very hardworking and popular baker in Kilembe Sub County, Kasese district. He learnt the skill from his aunt, Judith, during his senior six vacation. He enjoyed baking so much that he didn't think it was necessary for him to join University even when he got the points good enough to enable him get a good course. His parents even tried to persuade him to join University, but he refused saying, "After all, many people graduate and spend years on the streets looking for employment!"

A year after working with his aunt, he decided to start his own bakery. Since his aunt loved and believed in him, she got for him a loan from Centenary Bank which he used as capital.

Twenty years down the road, he is a very successful baker who supplies cakes for different functions to almost all regions in Uganda. Customers make their orders by booking a month or two in advance especially for big functions like weddings and introduction ceremonies.

He has ten strong employees and two wives who work tirelessly. His eight children also help out during holidays irrespective of their age.

a) About whom is the passage?

.....
.....

b) According to the passage when did the baker learn the skill?

.....
.....

c) From whom did he acquire the skill?

.....
.....

d) Why did Mukwasi refuse to join University?

.....
.....

e) For how long has he been running his own business?

.....
.....

f) Write any two functions for which Mukwasi bakes cakes?

.....
.....

g) How many people does he employ?

.....
.....

h) Why is it necessary for customers to book cakes for their functions a month or two earlier?

.....
.....

i) Give a word or group of words with the same meaning as "persuade" in the passage.

.....

52. Rearrange the following sentences to form a meaningful story.

- a) She waited for a reply from her.
- b) After writing the address on the envelope, she took her letter to the post office.
- c) She then dropped the letter into the mail box and went back home.
- d) After a fortnight, Rose got a reply from her friend.
- e) Rose decided to write a letter to a friend.
- f) After buying these things, she wrote her a letter.
- g) She bought a piece of paper and an envelope.
- h) She sealed the envelope and then wrote her friend's name and address on it.
- i) She bought a stamp from the post office and put it on the letter.
- j) She folded the letter and put it into the envelope.

.....

.....

.....

.....

.....

.....

.....

.....

.....

.....

.....

.....

.....

.....

.....

.....

.....

.....

.....

.....

.....

.....

53. Read the poem below and answer the questions that follow.

EXAMINATIONS

*Why do you torture candidates?
Young and old are crying because of you
Spending sleepless nights reading
Just to pass examinations.*

*The teachers are always there
Whether tired or hungry but dedicated
Always testing to see what their candidates know
Awarding grades and compiling reports
What a burden you are!*

*You fail students at all levels
Tempting them to cheat so as to pass
Indulging in malpractices of all sorts
You are a monster who deserves death.*

*Dear candidates
Even when the going gets tough and rough
Never be discouraged
Because when you succeed
You deserve a cake, a cock and a chocolate.*

Marbano

Questions

a) What is the poem about?

.....
.....

b) How many stanzas has the poem?

.....
.....

c) Which stanza talks about the teachers being dedicated?

.....
.....

d) According to the poem, who is tortured by the examinations?

.....
.....

e) What is the writer's advice to the candidates?

.....
.....

f) Why are the teachers always there?

.....
.....

g) Who wrote this poem?

.....
.....

h) What should be given to the candidate who succeeds?

.....
.....

i) Give the word to mean the same as:

i. Indulging.....

ii. Torture

54. Read the letter below and answer in full sentences the questions that follow

Hillside Primary School-Naalya,
P. O. Box 29679,
Kampala.

Monday 9th June 2014

The Headteacher,
Hillside Primary School-Naalya,
P. O. Box 29679,
Kampala.

Dear Sir,

Ref: **APOLOGY FOR FIGHTING A PRIMARY ONE CHILD**

Referring to the subject matter, I hereby humbly write to apologize for fighting a primary one child at school which led to my suspension from school last week.

It was Monday morning last week when I was running to the dining hall and found two children playing with dust. I told them to stop but they continued and even started throwing stones at me which made me annoyed. I slapped one of them and continued to the dining hall from where they called me to go to the office. I admit my mistake and promise not to repeat the same.

I will be grateful if my apology is handled with a positively parental consideration and I am allowed back to school.

Yours faithfully,
U. Pretty
UWIZEYE PRETTY

a) Which type of formal letter is the one above?

.....
.....

b) Who wrote the letter?

.....
.....

c) Why did she write the letter?

.....
.....

d) To whom was the letter written?

.....
.....

e) When did Pretty beat the Primary One child?

.....
.....

f) When was the letter written?

.....
.....

g) What happened to Pretty when she beat the child?

.....
.....

h) Where does the writer go to school?

.....
.....

i) What is the writer requesting the Headteacher to do according to the letter?

.....
.....

j) Give the opposite of the word "admit" as used in the letter.

.....

55. Below is a job advertisement that appeared in the Daily Monitor newspaper of 19th March 2014. Study it carefully and answer in full sentences the questions that follow.

BARGAIN BUY SUPERMARKETS

APPLICATIONS ARE INVITED FOR THE POST OF SHOP ATTENDANT (TWO) AT THIS NEW SUPERMARKLET ALONG GAYAZA ROAD. ALL APPLICANTS MUST BE ABLE TO READ, WRITE AND SPEAK GOOD ENGLISH.

SALARY IS ATTRACTIVE PLUS FREE MEALS. APPLY IN OWN HANDWRITING TO THE GENERAL MANAGER, BARGAIN BUY SUPERMARKETS LTD, P.O.BOX 8987, KAMPALA

a) Which supermarkets advertised the post?

.....
.....

b) Which post is being advertised?

.....
.....

c) When was the advert put in the newspaper?

.....
.....

d) How many posts are being advertised?

.....
.....

e) Where is the new supermarket located?

.....
.....

f) What should the applicants be able to do?

.....
.....

g) What kind of applications should be submitted?

.....
.....

h) To whom will the applications be addressed?

.....
.....

i) Write in full:

Ltd

END